



UNIVERSITY OF CAMBRIDGE INTERNATIONAL EXAMINATIONS
International General Certificate of Secondary Education

GEOGRAPHY

Paper 4 Alternative to Coursework

INSERT

0460/04

May/June 2007

1 hour 30 minutes

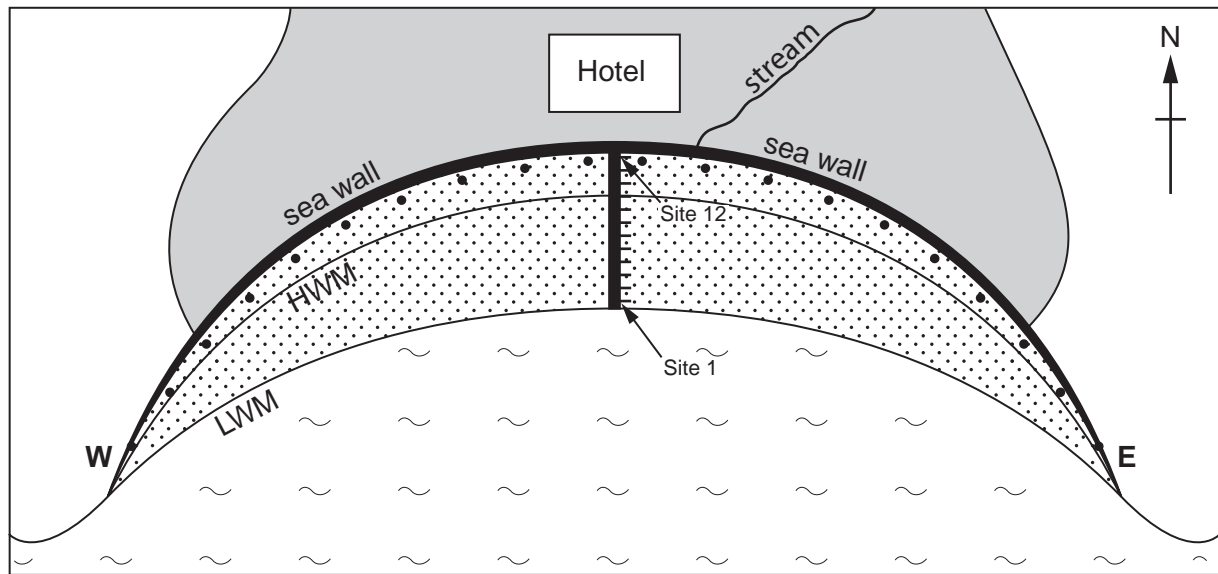
READ THESE INSTRUCTIONS FIRST

This Insert contains Fig. 4 for Question 2.




This document consists of **2** printed pages.



Sketch map of the local beach and the investigation sites



Key

- point for observing 'other material'
-  urban area
-  local beach
- HWM high water mark
- LWM low water mark
-  beach material transect line

0 20 40 60
paces

Fig. 4 for Question 2